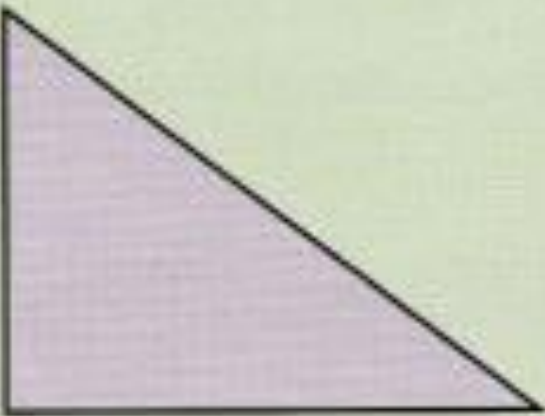


Measure each shape and work out the perimeter.

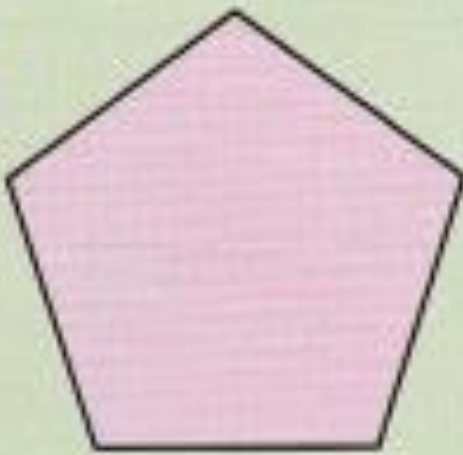
1



2



3



Work out the perimeter of each shape.

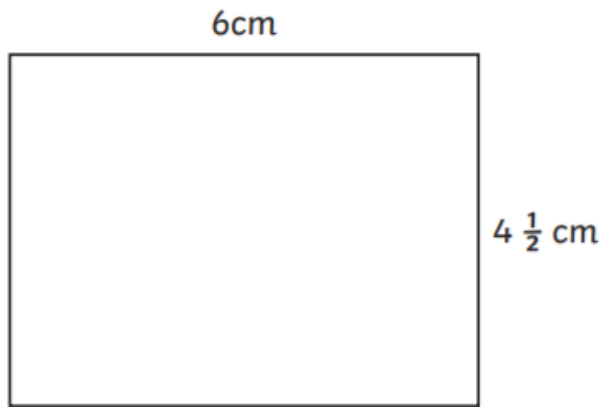
4 square  
sides 9 cm

5 rectangle  
sides 7 cm, 6 cm

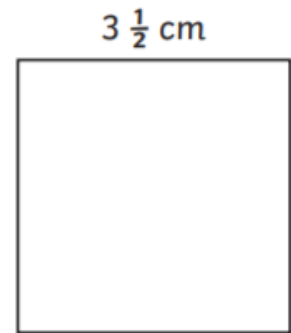
6 equilateral triangle  
sides 8 cm

7 regular pentagon  
sides 5 cm

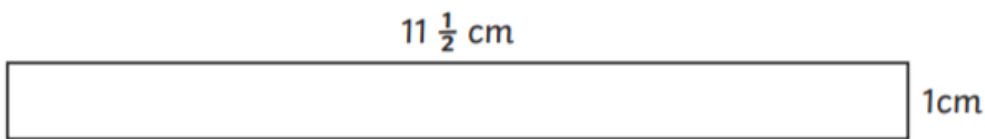
Calculate the perimeters of these rectangles and squares:



a) perimeter \_\_\_\_\_ cm



b) perimeter \_\_\_\_\_ cm



c) perimeter \_\_\_\_\_ cm