

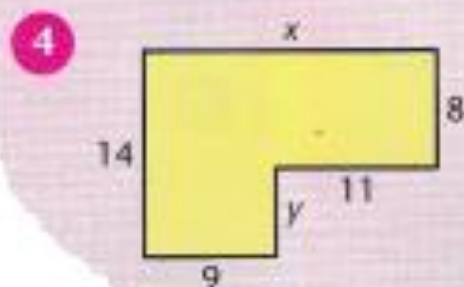
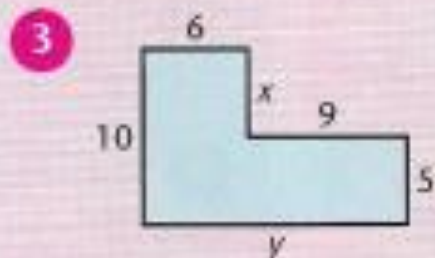
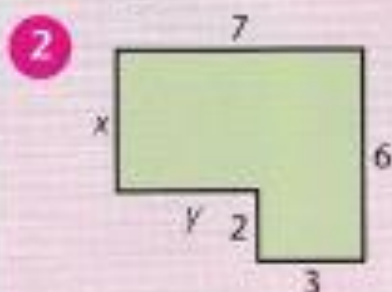
- 1 Copy and complete this table showing the measurements of rectangles.

Length	Width	Perimeter
8 cm	4 cm	
11 cm	6 cm	
6 cm	2 cm	
8 cm	7 cm	
10 cm	9 cm	
9 cm	5 cm	

For each of the following shapes work out:

- a) the missing lengths  $x$  and  $y$   
 b) the perimeter of the shape.

All lengths are in metres.



- 1 Copy and complete this table showing the measurements of rectangles.

Length	Width	Perimeter
16 cm		50 cm
4.5 cm	2 cm	
	5 cm	29 cm
11 cm		35 cm
5.7 cm	4.8 cm	
3.3 cm		10 cm