

Challenge 2

Draw lines to match the correct digital time to each clock.



8:28



6:12



9:04



5:18



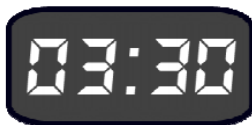
3:42



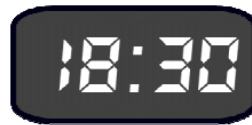
11:49

Read the digital times and write the times in words.

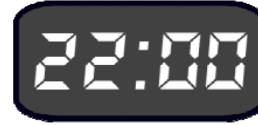
1.



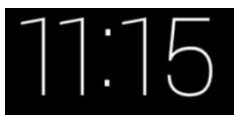
2.



3.



4.



5.



6.

