

HeadStart
primary

Science

Year 1

Scaled Score Progress Test



ANSWERS



Section 1: Plants

1 Trees across the seasons

Draw lines to match each season to the correct sentence. One has been done for you:



summer



autumn



winter



spring

Leaves change colour and fall from the tree.

New leaves start to grow.

The tree has a full set of green leaves.

There are no leaves left on the tree.

2


marks

(2 marks for all 3 correct, 1 mark for 2 correct.)

Section 1: Plants

2 Identifying wild flowers

Draw lines to match each flower to its name. One has been done for you:



bluebell



buttercup



dandelion



daisy

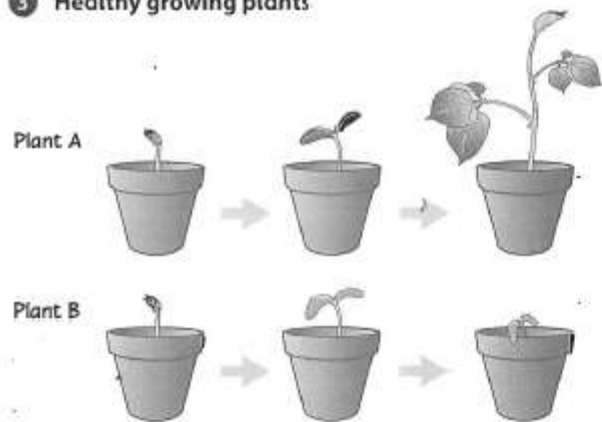
2

marks

(2 marks for all 3 correct, 1 mark for 2 correct.)

Section 1: Plants

3 Healthy growing plants



Look at Plants A and B above and answer the following questions:

a Which plant might not have been watered? B

1

(1 mark)

b Plants need water to grow. Write **one** more thing that plants need to grow.

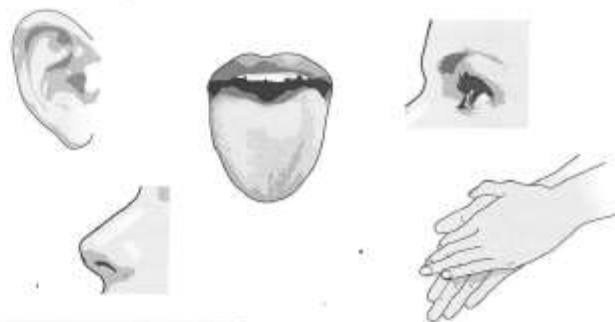
e.g. soil / light / sunlight / room to grow / warmth

1

(1 mark)

Section 2: Animals, including humans

4 Body parts for senses



Complete the following:

- a I smell with my nose
- b I touch with my fingers / or other body parts
- c I hear with my ears
- d I see with my eyes

(2 marks for all 4 correct, 1 mark for 3 correct.)

2

(2 marks)

Circle the correct word to complete the sentence below:

e When I touch a hedgehog, it feels

prickly

silky

woolly


1


(1 mark)


Section 2: Animals, including humans


5 Identifying animals

Draw lines from the animal to the sentence which describes it:

a  It has wings.

b  It has a mane.

c  It has a horn.

d  It has scales.

(2 marks for all 4 correct, 1 mark for 3 correct.)

2

marks

Section 2: Animals, including humans

6 The same or different?

Look at the pictures and complete the following:



- a Write down **one thing** that is **similar** about the sheep and the cow.
e.g. four legs (Accept other appropriate answers.)
- b Write down **one thing** that is **different** about the sheep and the cow.
e.g. different colours (Accept other appropriate answers.)

1

1 mark

1

1 mark



- c Write down **one thing** that is **similar** about the butterfly and the ant.
e.g. six legs (Accept other appropriate answers.)
- d Write down **one thing** that is **different** about the butterfly and the ant.
e.g. One has wings and the other doesn't. (Accept other appropriate answers.)

1

1 mark

1

1 mark

Section 3: Everyday materials

7 Properties of materials

Complete the following:

- a Draw yourself in the picture below, so that you would keep dry.



appropriate drawing of a child under the umbrella

1

1 mark

- b Circle **two** words from the list below to show the most important properties of the umbrella.

waterproof

transparent

green

lightweight

pretty

heavy

2

2 marks

Section 3: Everyday materials

8 Objects and materials

Draw lines from each object to the material it is made from:

a wall

b carton

c cup

d box

wood

plastic

brick

foil

(2 marks for all 4 correct, 1 mark for 3 correct.)

2

2 marks

Complete the following:

- e Write down **one** different object that is often made of **glass**.
Accept any object that could be wholly or partly made out of glass.

1

1 mark

Section 3: Everyday materials

9 Properties of materials



jar



cactus



sandpaper



mug



hedgehog



plate

Three of the objects above are smooth.
Write them down below:

1 jar

2 mug

3 plate

3
3 marks

Section 4: Seasonal changes

10 Autumn or spring?



Circle whether the following sentences describe *autumn* or *spring*:

a New-born lambs are in the fields.

~~spring~~ autumn

b Leaves on the trees change colour and start to fall to the ground.

spring ~~autumn~~

c Horse-chestnut trees drop conkers to the ground.

spring ~~autumn~~

2
2 marks

(2 marks for all 3 correct, 1 mark for 2 correct.)

Section 4: Seasonal changes

11 Daylight



	daily hours of daylight
month A	8 hours
month B	13 hours
month C	16 hours
month D	11 hours

Look at the chart above and answer the following questions:

- a Which season is month C in?
Circle your answer.

winter summer

1

1 mark

- b Would you need a warm scarf in month C?
Circle your answer.

yes no

Explain your answer.

Answer should suggest month C is too warm / no need for a scarf.

1

1 mark

Page Total 2

Section 4: Seasonal changes

12 Seasonal weather

Draw lines to match the seasons to the correct sentences.
One has been done for you:



summer



spring



winter



autumn

You may not always need your coat, but it is not the hottest season.

The weather is at its coldest.

This is the warmest season.

The weather is turning colder, but it is not the coldest season.

[2 marks for all 3 correct, 1 mark for 2 correct.] 2 marks

2

Page Total 2

Test Total 30/30